


1. Correct answer:

8

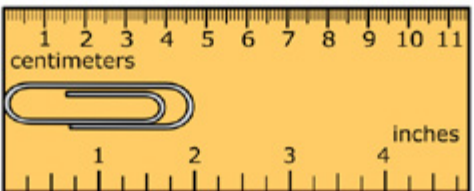
Jan has 12 flowers. She gives 4 to her mother. Choose the number of flowers Jan has now.



2. Correct answer:

5 centimeters, 2 inches

Carson measures his paper clip in centimeters and in inches. Move numbers to the lines to show the estimated length of the paper clip in centimeters and in inches.



The paper clip is about 5 centimeters long.

The paper clip is about 2 inches long.

3. Correct answer:

$$25 \rightarrow 20 + 5 = 25$$

Match the number 25 with the correct equation. First choose 25 on the left, and then choose the true equation on the right.

25

$20 + 5 = 25$

$5 + 15 = 25$

$10 + 5 = 25$

4. Correct answer:

148

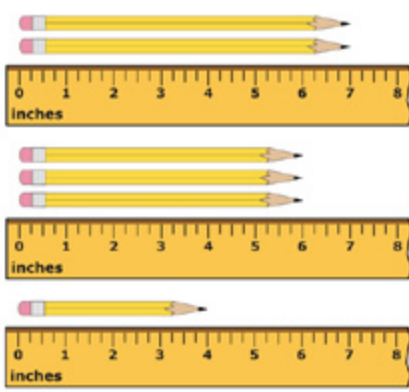
Lori and Maria are jumping rope. Lori jumps 138 times. Maria jumps 10 **more** times than Lori. Choose the circle next to the number of times Maria jumps.

- 128
- 139
- 148

5. Correct answer:

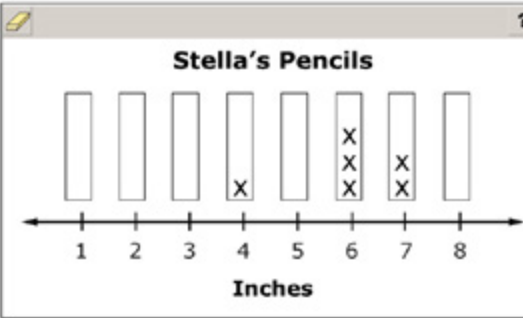
4 = X, 6 = X X X, 7 = X X

Stella measures the pencils in her desk.



Create a line plot using the lengths of Stella's pencils.

Stella's Pencils



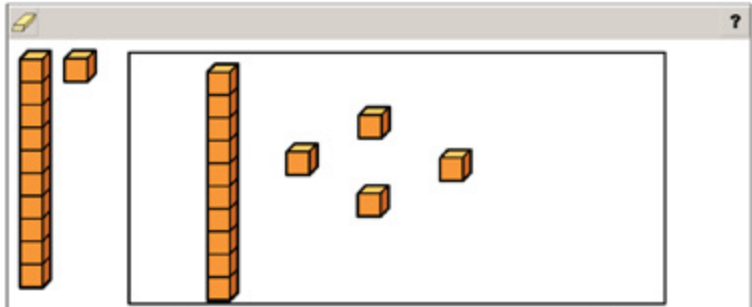
Length (Inches)	Number of Pencils
4	1
6	3
7	2

6. Correct answer:

14

Jack has 26 blocks. Amy has 12 blocks. Use the blocks to find how many more Jack has than Amy. Then choose the number that shows how many **more** blocks Jack has than Amy.

$26 - 12 = \underline{\quad}$

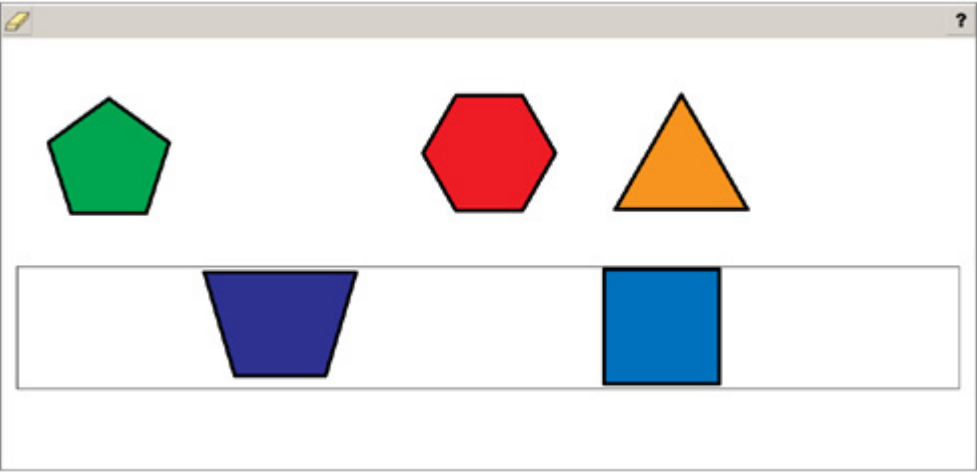


14 18 24

7. Correct answer:

second and fifth shape

Move each shape that has **only** four angles to the box below.




8. Correct answer:

12-inch ruler → hand and spoon, meter stick → truck and flag

Match each tool to the objects it **best** measures.

First look at the description of a tool. Then choose the pictures of **all** of the objects that the tool best measures.

Every object should be matched with a tool.



12-inch ruler	<input checked="" type="checkbox"/>	<input type="checkbox"/>	<input type="checkbox"/>	<input checked="" type="checkbox"/>
meter stick	<input type="checkbox"/>	<input checked="" type="checkbox"/>	<input checked="" type="checkbox"/>	<input type="checkbox"/>

9. Correct answer:

$14 + 32 = \text{box}$

Kyle reads 14 pages of a book. Then he reads 32 **more** pages. Choose the equation Kyle could use to find how many **total** pages he reads.

$14 + \square = 32$

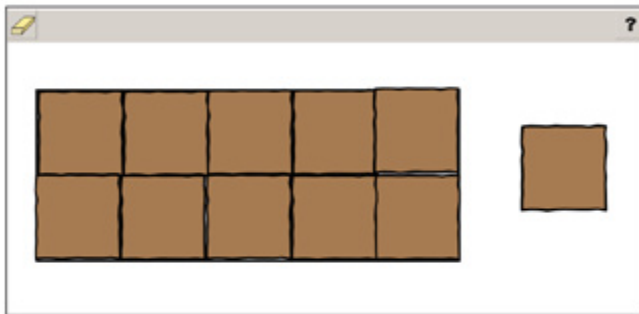
$14 + 32 = \square$

$32 - \square = 14$

10. Correct answer:

10

Mr. Harper baked a pan of brownies. He wants to know how many brownies are in the pan. Move squares to the pan to find the number of brownies Mr. Harper baked.



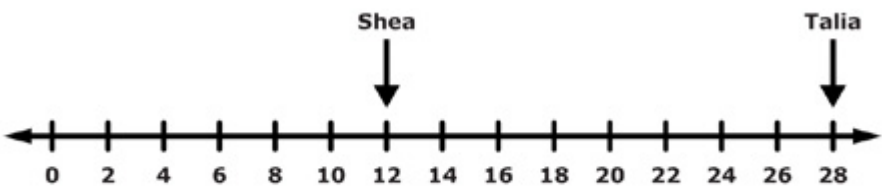
Choose the total number of brownies in the pan.

5 10 12

11. Correct answer:

16 blocks

Talia walks 28 blocks. Shea walks 12 blocks.



How much **farther** does Talia walk than Shea?

8 blocks




16 blocks

28 blocks

12. Correct answer:

first clock → 4:45, second clock → 12:25, third clock → 8:10

Match the clocks that show the same time.

	4:45	8:10	12:25
	<input checked="" type="checkbox"/>	<input type="checkbox"/>	<input type="checkbox"/>
	<input type="checkbox"/>	<input type="checkbox"/>	<input checked="" type="checkbox"/>
	<input type="checkbox"/>	<input checked="" type="checkbox"/>	<input type="checkbox"/>