


1. Correct answer:

any 9 pieces of paper

Mr. Black needs 9 pieces of paper. Choose 9 pieces of paper for Mr. Black.

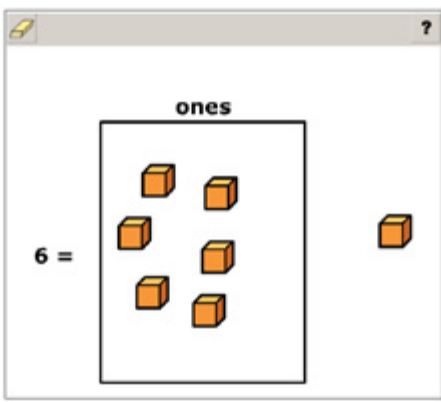


2. Correct answer:

6 blocks

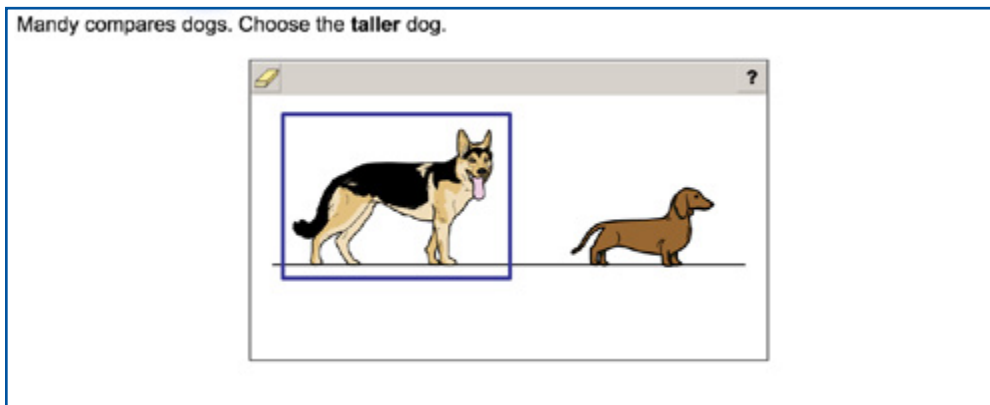
Kim is creating the number 6 using base-ten blocks.

Move blocks to the box to help Kim show 6.



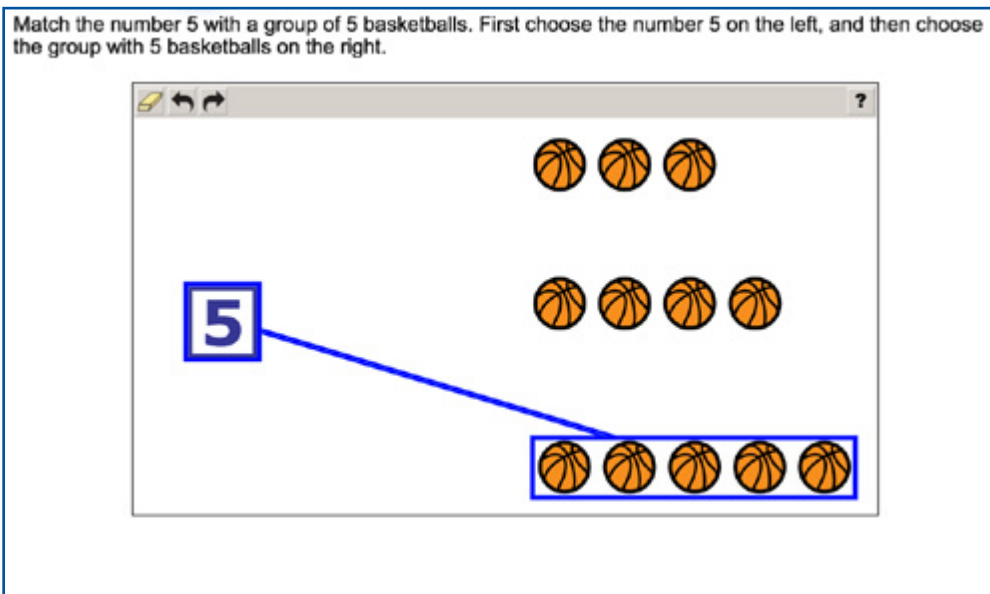
3. Correct answer:

dog on the left



4. Correct answer:

5 → 5 basketballs (on bottom)



5. Correct answer:

11

Kelly has 8 pet fish. She goes to the store to get 3 more fish. Move the number to the line that shows how many fish Kelly has now.



?

$8 + 3 = \underline{11}$

10 12

6. Correct answer:

2nd and 3rd boxes

Choose **all** the boxes that have 4 balloons.

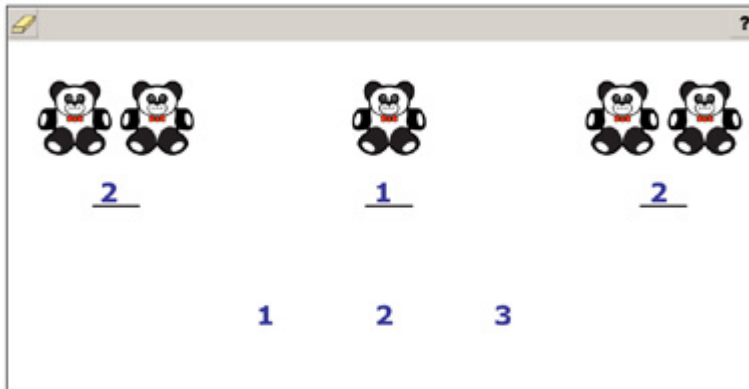
?

The image shows three square boxes, each containing balloons. The first box contains 3 green balloons. The second box contains 4 yellow balloons and is highlighted with a blue border. The third box contains 5 orange balloons and is also highlighted with a blue border.

7. Correct answer:

2, 1, 2


David is counting his groups of bears. Move numbers to the lines to show how many are in each group.



8. Correct answer:

2nd (blue) shape

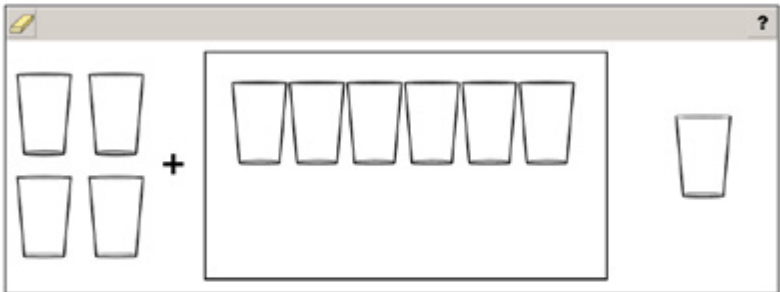
Connor is looking for a cone. Help Connor by choosing the cone.




9. Correct answer:

6 cups

Isaiah has 4 cups. He needs 10 cups.
Move cups into the box to show how many more cups Isaiah needs.



Choose the number that shows how many **more** cups Isaiah needs to have 10 cups in all.



10. Correct answer:

12 → top set of circles, 9 → bottom set of circles

Match each number with the picture that shows the same amount. First choose the number and then choose the picture.

